





La decena

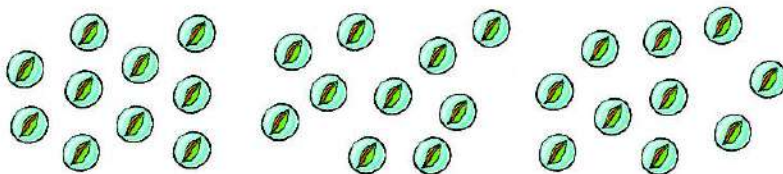
1 Cuenta y rodea 10.



2 Dibuja círculos hasta tener una decena en cada caso.



3 Haz grupos de 10 y completa.



decenas

Sumas y restas

1 Resuelve las operaciones y colorea el cohete según la clave.



6




7



8



9



2 Calcula.

$$\begin{array}{r} 6 \\ + 2 \\ \hline \square \end{array}$$

$$\begin{array}{r} 7 \\ + 2 \\ \hline \square \end{array}$$

$$\begin{array}{r} 4 \\ + 3 \\ \hline \square \end{array}$$

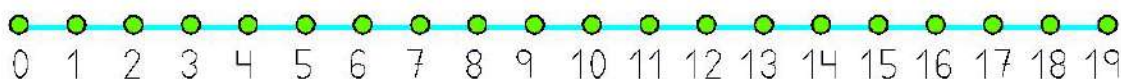
$$\begin{array}{r} 8 \\ - 3 \\ \hline \square \end{array}$$

$$\begin{array}{r} 9 \\ - 7 \\ \hline \square \end{array}$$

FICHA 4

Sumas con números hasta el 19

1 Cuenta y completa las sumas.



$$8 + 4$$

$$8 + \square = \square$$

$$7 + 5$$

$$\square + \square = \square$$

$$8 + 6$$

$$\square + \square = \square$$

$$9 + 4$$

$$\square + \square = \square$$

$$9 + 7$$

$$\square + \square = \square$$

2 Suma.

$$8 + 5 = \square$$

$$7 + 4 = \square$$

$$7 + 6 = \square$$

$$9 + 6 = \square$$

$$6 + 6 = \square$$

$$8 + 7 = \square$$

$$7 + 7 = \square$$

$$12 + 3 = \square$$

$$11 + 7 = \square$$