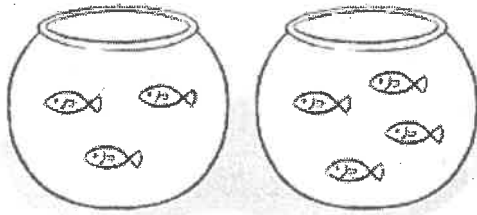


## Sumas en horizontal con números hasta el 10

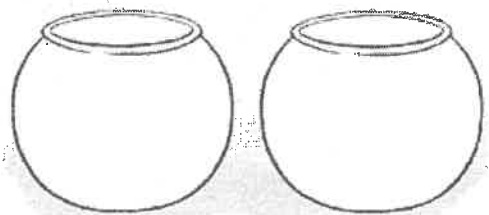
1 Dibuja, colorea y completa.

$$3 + 4$$



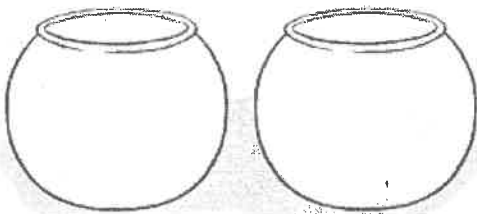
$$\boxed{3} + \boxed{4} = \boxed{\phantom{0}}$$

$$4 + 2$$



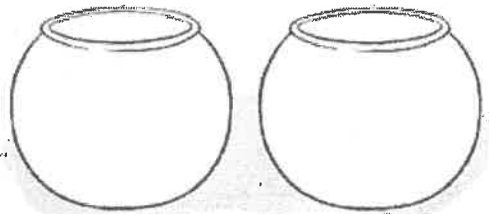
$$\boxed{\phantom{0}} + \boxed{\phantom{0}} = \boxed{\phantom{0}}$$

$$7 + 1$$



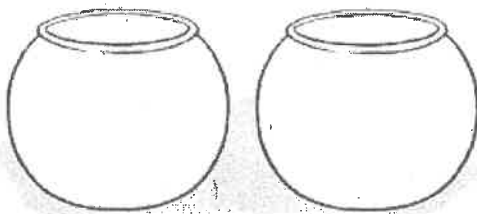
$$\boxed{\phantom{0}} + \boxed{\phantom{0}} = \boxed{\phantom{0}}$$

$$5 + 2$$



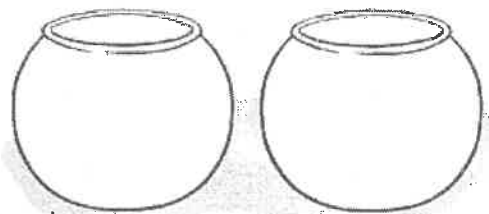
$$\boxed{\phantom{0}} + \boxed{\phantom{0}} = \boxed{\phantom{0}}$$

$$2 + 3$$



$$\boxed{\phantom{0}} + \boxed{\phantom{0}} = \boxed{\phantom{0}}$$

$$6 + 3$$



$$\boxed{\phantom{0}} + \boxed{\phantom{0}} = \boxed{\phantom{0}}$$